

M.E.S. COLLEGE OF ARTS & COMMERCE, ZUARINAGAR – GOA
B. Com Semester I Examination (Regular) January ,2021
General Management CC1 (COC101)

[Time: 9.00 a.m. to 11.00 a.m.]

[Total Marks: 40]

Instructions:

- 1) Answer any **Ten Sub Questions of 2 marks each** from Q.No.1, sub questions i to xvi
- 2) Each Sub Question from Q.No. 1 carries 2 marks each.
- 3) Answer any **Four Sub Questions of 5 marks each** from Q.No.2, sub questions i to vi
- 4) Each Sub Question from Q.No. 2 carries 5 marks each.
- 5) Figures to the right indicate maximum marks allotted.

Q.1. Answer any ten of the following:

10x2 = 20

- i. Write a short note on Financial Management.
- ii. Explain the concept of Decision Making
- iii. What do you understand by Contingency Approach to Management?
- iv. Explain any two limitations of Rational Decision Making.
- v. Write a short note on Top Level Management.
- vi. What do you understand by Non-Programmed Decisions?
- vii. Explain the concept of Management
- viii. Explain any two features of Decision Making.
- ix. What is Conflict Management?
- x. Explain any two causes of stress.
- xi. What do you understand by Resistance to Change?
- xii. Explain the concept of Supply Chain Management
- xiii. Explain any two causes for change.
- xiv. What do you understand by Logistics Management?
- xv. Explain any two types of Goal Conflict.
- xvi. What is Green Management?

Q.2. Answer any four of the following:

4x5 = 20

- i. Discuss any five features of Japanese Style of Management.
- ii. Explain the process of Creativity in Decision Making.
- iii. Distinguish between Management and Administration.
- iv. Explain any five guidelines for Effective Decision Making.
- v. Discuss any five individual factors effecting Resistance to Change.
- vi. Explain any five types of Stress.

B.Com. II SEMESTER END EXAMINATION, JULY, 2021
MATHEMATICS
CC8-COMMERCIAL ARITHMETIC-II (UCAC102)
(CORE COURSE)

Duration: 2 Hours

Marks: 40

Instructions:

- 1) Answer any **five sub questions of 2 marks each** from Q.NO. I, sub questions 1 to 8.
- 2) Each sub question from Q. No. I carries 2 marks each.
- 3) Answer any **six sub questions of 5 marks each** from Q.NO. II, sub questions 1 to 8.
- 4) Each sub question from Q. No. II carries 5 marks each.
- 5) Figures to the right indicate maximum marks allotted.

Q. I. Answer any five from the sub – questions 1 to 8. [5 × 2 = 10]

1. Find the mid – point of the line segment joining the points A(20, 80) and B(4, 18).
2. If 22 notebooks cost Rs. 396, then find the cost of 28 notebooks.
3. If A(13, 23) and B(17, 27), then find d(AB).
4. If the function f is defined by $f(x) = 6x + 8$ for all $x \in \mathbb{R}$, then find $f(4)$.
5. If $y = 18e^x + 16\log x + 6x - 400$, then find $\frac{dy}{dx}$.
6. i) Find the slope of the line parallel to the line $4x + 17y - 30 = 0$.
ii) Write the formula for Producer' surplus.
7. If $y = e^{12x^9}$, then find $\frac{dy}{dx}$.
8. i) Find $\int \left(e^x + 7^x - \frac{4}{x} \right) dx$
ii) Find $\int_0^2 8 dx$

Q. II. Answer any six from the sub – questions 1 to 8. [6 × 5 = 30]

1. If the sum of four numbers is 600 and it is known that they are in the ratio 3: 4: 9: 14, then find the four numbers.
2. i) If the marked price of a computer is Rs. 30000 and the store owner allows a discount of 8% on the marked price, then find the selling price of the computer.
ii) In a survey of 400 students, it was found that 58% like to watch Cricket and 32% like to watch Hockey. Find the number of students who like to watch Cricket and also find the number of students who like to watch Hockey.
3. i) Find the point of intersection of the lines $3x + 6y = 24$ and $4x + 7y = 31$.
ii) Find the equation of the line passing through the points A(6, 4) and B(13, 8).

4. If the revenue function is given by $R(x) = x^6 + 9x^2$, where x stands for number of units sold, then find Marginal Revenue(MR) when $x = 1$.

5. i) Find $\lim_{x \rightarrow 8} \frac{x^2 - 13x + 40}{x - 8}$

ii) If $f(x, y) = x^4 y^4$, then find f_x and f_{xy} .

6. If the revenue function is given by $R(x) = 1800x - 90x^2$ (where x stands for number of units sold), then find the value of x at which the revenue is maximum.

7. If the Marginal cost function of a certain firm is given by $MC = x^8 + 8$, where x stands for number of units manufactured, then find the Cost function given fixed cost is Rs. 4000.

8. Solve graphically:

$$\text{Maximize } z = 14x + 18y$$

$$\text{Subject to } 3x + 2y \leq 12$$

$$x + y \leq 5$$

$$\text{where } x \geq 0 \text{ and } y \geq 0$$

M.E.S. COLLEGE OF ARTS & COMMERCE
Zuarinagar, Goa
B.Com SEMESTER III END EXAMINATION, JANUARY, 2021
FUNDAMENTALS OF COST ACCOUNTING (COC 106)

Instructions:

- i) Answer any **Four** questions from Q.No. 1 to Q.No. 6.
- ii) Working note should form part of answer.
- iii) Simple calculators are allowed.

Time: 12.00 p.m to 2.00 p.m (Two hours)

Total Marks: 40

Q.1. The following details have been extracted from the books of Facebook Co. Ltd for the year ended 31/3/2020.

Particulars	Amt (₹)
Opening stock of raw material	1,56,350
Closing stock of raw material	1,52,500
Corporate Managers Salary	22,00,000
Rent of plant	2,55,000
Sale of defective raw material	17,000
Hire charges for special equipment	114,000
Purchase of Raw materials	9,70,500
Carriage inwards	48,650
Insurance premium for stock of raw material	45,200
Insurance premium for computer	25,400
Insurance premium for delivery van	23,000
Sale of factory scrap	33,600
Income tax	20,000
Depreciation on computer	1,74,600
Salaries to drawing and designing department	3,71,400
Opening work in progress	1,88,600
Closing work in progress	1,93,000
Brand ambassadors remuneration	9,60,000
Direct wages: Skilled labourers	6,31,000
Unskilled labourers	2,49,000
Cost of Catalogue Printing	1,15,000
Opening stock of finished goods	12,80,000
Closing stock of finished goods	15,00,000

1. The Corporate Managers salary to be apportioned between the factory and the office in the ratio of 2:8
2. Selling price is 110% of cost price.

From the above Prepare Cost Sheet showing various elements of cost.

(10)

Q.2. Ceat Ltd. manufactures a product which passes through three processes. The following particulars are available for the year ended 31st March, 2020.

Particulars	Process I	Process II
Raw Materials (Kgs)	40,000	18,400
Cost of raw materials per kg. (₹)	10	12
Direct Wages (₹)	96,000	72,000
Direct Expenses (₹)	60,800	43,000
Manufacturing Expenses (₹)	83,840	24,000
Normal Loss (%)	4%	7%
Weight Loss (%)	6%	3%
Scrap Value per 10kg. (₹)	36	50
Output Transferred to Next Process (%)	60%	50%
Output Sold at the end of the Process (%)	40%	50%
Selling price of output per kg. (₹)	56	64

The percentage of normal Loss & of weight Loss are based on the total input in the process.

Prepare Process I and Process II Account.

(10)

Q.3. MVR Homes Constructions Ltd. undertook a contract for ₹ 10,00,00,000 crores for construction of Building which commenced on 1st June 2018. The accounts are closed on 31st March, every year.

Particulars	2018-19 (₹)	2019-20 (₹)
Plant issued at commencement	7,50,000	-
Direct material	46,00,000	94,00,000
Direct wages	70,00,000	1,35,00,000
Direct Expenses	2,50,000	4,75,000
Indirect Expenses	1,00,000	2,00,000
Sub- contract charges	250,000	4,75,000
Work certified (Cumulative)	2,25,00,000	7,50,00,000
(Work uncertified) Incomplete work at the end	5,00,000	5,00,000
Material on site at the year end	2,50,000	3,50,000
Architects fees	3% of Work certified	2% of Work certified
Cash received	1,80,00,000	6,00,00,000

Adjustments:

1. Charge depreciation on plant @ 25% p.a. on original cost/ fixed instalment method.

Prepare Contract Account for two years and show the calculation of profit transferred to Profit and Loss Account.

(10)

Q.4. In respect of Asus Laptop Manufacturing Co. the following figures have been obtained for the year ended 2018.

Particulars	Amt (₹)
1. Cost of Materials	24,00,000
2. Factory Overheads	12,00,000
3. Selling Overheads	8,96,000
4. Distribution Overheads	5,60,000
5. Direct Wages	20,00,000
6. Administrative Overheads	13,44,000
7. Profit	16,80,000

Adjustments:

A work order has been executed in 2019 and the following expenses have been incurred:

- Materials ₹ 32,000/-
- Wages ₹ 20,000/-

2. At what price should the product be sold so as to earn the same rate of profit on the selling price as in 2018?
3. Factory overheads are based on direct wages while all other overheads are based on factory cost.

Prepare Cost sheet for 2018 and Estimated Cost Sheet for 2019.

(10)

Q.5. A. The following details are available from the Costing records of Tesco Pvt. Ltd Co. for the year ended 31/3/2020.

Particulars	Process A
Materials	2,000 Tons @ ₹ 100 per ton
Direct Wages	₹ 50,000
Factory Overhead	80% of Direct Wages
Wastage	100 Tons
Sales of By-product	300 Tons at Cost plus 20%

Prepare Process 'A' Account and Process 'A' By-Product Account.

(05)

B. M/S Tata Housing Co. Ltd begins to trade on 1/4/2019. The following was the expenditure on the contract for ₹ 6,00,000.

Particulars	Amt (₹)
Materials issued to contract	1,02,000
Plant used for contract	30,000
Wages incurred	1,62,000
Other expenses incurred	10,000

Additional information:

1. Cash received on account to 31st March 2020 amounted to ₹ 2,56,000 being 80% of the work certified.
2. Of the Plant and materials charged to the contract, plant which cost ₹ 6,000 and materials which cost ₹ 5,000 were lost.
3. On 31st March 2020, plant which cost ₹ 5,000 was returned to stores, the cost of work done but uncertified was ₹ 2,000 and material costing ₹ 4,600 were in hand on site.
4. Charge 15% depreciation on plant, keep in reserve 1/2 profit received and prepare a Contract account from the above particulars.

(05)

Q. 6. Write short notes on any **Four** of the following

(4 x 2.5=10)

- a) Scope of Cost Accounting (Any three points)
- b) Any two types of Scrap
- c) Distinguish between Financial Accounting and Cost Accounting (Any three points)
- d) Accounting treatment of Defective work
- e) Advantages of Cost Accounting (Any three points)
- f) Escalation and De-escalation clause in Contract costing
- g) Features of Process costing (Any four points)

M.E.S. COLLEGE OF ARTS & COMMERCE
ZUARINAGAR, GOA
B.Com SEMESTER IV END EXAMINATION, JULY, 2021
INCOME TAX (DIRECT TAX), (CC13, UCOC109)

Instructions:

- i) Answer any **FOUR** questions from Q.No. 1 to Q.No. 6.
- ii) Working note should form part of answer.
- iii) Simple calculators are allowed.
- iv) Figures to the **right** indicate marks allotted.

Time: 12.00 p.m to 2.00 p.m (Two hours)

Total Marks: 40

1. A. Mr. Sohaib Shaikh earned the following incomes during the financial year ended on 31st March, 2020. **(05 marks)**

Compute his Gross Total Income for the Assessment Year 2020-2021 assuming that he is:

- i) Resident and ordinary resident.
- ii) Resident but Not ordinarily resident.
- iii) Non-resident.

Sr.No.	Particulars	Amt Rs.
1.	Rent from a property in Delhi received in USA	1,00,000
2.	Income from a business in USA controlled from Delhi	1,20,000
3.	Income from a business in Mumbai controlled from USA	1,10,000
4.	Rent from a property in USA received there but later remitted to India	1,30,000
5.	Interests from deposits with Indian Bank in Mumbai	1,40,000

1. B. Rowan Fernandes is a foreign citizen (not being a person of Indian origin), leaves India for the first time in the last 20 years on November, 22nd, 2017. During the calendar year 2018, he comes to India on September 1st for a period of 30 days. During the calendar year 2019, he does not visit India at all but comes to India on 18th January, 2020.

Determine the residential status of Rowan Fernandes for the A.Y 2020-21. (05 marks)

Q.2. Answer any **TWO** out of the following three questions.

Q.2.A. Mrs. Shalini who is a resident in India, makes the following investments during the Previous year 2019-20. **(05 marks)**

- a. Repayment of loan taken from ICICI Bank to construct her residential house, Principal amount Rs 80,000.

- b. Insurance premium on the life of her daughter Rs 17,000 (Sum assured Rs 2,70,000) policy is taken during 2012-13.
- c. Insurance premium on the life of her husband Rs 14,000, policy is taken during 2012-13.
- d. Repayment of loan taken from HDFC Bank for her son's higher education Rs 60,000
- e. Contribution to Recognized Provident Fund Rs 27,000.

Compute the deductions available under Section 80C for the Assessment year 2020-21.

Q.2.B. Tata Motors Ltd owns two buildings 'A' and 'B' on April 1, 2019 (rate of depreciation: 10%, depreciated value: ₹ 28,31,000. It purchases on December 1, 2019 building 'C' (rate of depreciation: 10%) for ₹ 8,20,000 (out of which ₹ 6,20,000 is paid by an account payee cheque and ₹ 2,00,000 is paid in cash). It sells building 'A' during the previous year 2019-20 (say on January 10, 2020) for ₹ 17,40,000. Compute the depreciation and written down value of the block under sec 32 for the previous year 2019-20. **(05 marks)**

Q.2.C. Answer **both** the questions **(2.5 x 2=05 marks)**

- a) Discuss allowability of business expenditure u/s 37 and give any three expenses which are allowable.
- b) Deduction in respect of interest on deposits in savings account u/s 80TTA.

Q.3. During the Previous Year 1/4/2019-31/3/2020, Mr. Saidutt Naik (48 years) is employed by a Pharmaceuticals Company situated at Kanpur. He gets the following from the employer.

1. Basic salary: ₹ 40,000 per month.
2. Dearness Allowance 30% of basic salary (40% is considered for calculating retirement benefits like Gratuity and pension).
3. Dearness Pay ₹ 6,000 per month (nothing is considered for retirement benefits).
4. Fixed commission ₹5,000 per month, commission (as incentive): 5% of turnover (and extra commission of 2% if annual turnover exceeds ₹ 18,00,000).
5. House Rent allowance ₹16,000 per month (Rent paid is ₹ 18,000 per month upto June 30, 2019 and after that he shifts in his own house but house rent allowance is received throughout the previous year, 2019-2020).
6. Employer's contribution towards Recognized Provident Fund: ₹ 7,000 per month, interest credited in Provident Fund Account: ₹ 57,000 (rate of interest 11%).

7. Mr. Saidutt contributes annually ₹ 5,600 per month towards Recognized Provident Fund (RPF) (an additional sum of ₹ 75,000 is contributed on March 11, 2020). Income of Mr. Saidutt from his other business is ₹ 130,000.

8. Contribution towards Pension Fund of LIC ₹6,000.

9. Medical insurance premium paid by cheque for mother ₹8,000 in P.Y 2019-20.

10. Interest on loan taken for higher education ₹ 30,000.

11. He donated ₹ 7,000 to Prime Minister's Armenia Earthquake Relief Fund and ₹ 10,000 to Jawaharlal Nehru Memorial Fund.

Determine the net income and tax liability of Mr. Saidutt Naik for the assessment year 2020-21 on the assumption that monthly turnover achieved by Mr. Saidutt is ₹ 1,20,000. (10 marks).

Q.4. The following is the receipt and payment accounts of Mr. Nelson Rodrigues (Age 59 years) a Chartered Accountant for the year ending 31/3/2020. (10marks)

Cash Book

Receipts	₹	Payments	₹
Opening balance	1,38,000	Staff salaries	1,92,000
Consultation fees	24,20,000	General expenses	26,000
Audit fees	12,40,000	Purchase of furniture	22,36,000
Gift from father	10,000	Office stationery	44,000
Fees from clients for 2019-20	56,000	Income tax	38,000
		Membership fees of ICAI	1,600
		Advertising expenses	30,000
		Motor car expenses	48,800
		Son's marriage expenses	58,000
		Office rent	24,000
		Purchase of laptops	1,50,000
		Closing balance	10,15,600
Total	38,64,000	Total	38,64,000

Additional information:

- Salary of ₹ 32,000 paid to his daughter, is included in staff salaries, 30% of which is considered unreasonable.
- General expenses include ₹ 4,500 paid as premium on his life insurance policy.
- One-fourth of the motor car expenses relate to his personal use.
- Advertisement expenses include ₹ 10,000 paid for an advertisement in souvenir of a political party.
- During the year he donated ₹ 30,000 to Prime Minister's Drought Relief fund and ₹ 20,000 towards Zilla Saksharta Samiti.
- He deposited ₹ 80,000 towards Public Provident fund.

Compute taxable income and tax liability of Mr. Nelson Rodrigues for the Assessment year 2020-21.

Q.5. Answer in short any **FOUR** of the following in relation to Income Tax Act: (2.5 x 4=10)

- a) Definition of 'Company' u/s 2(17).
- b) Deduction in respect of contribution to certain pension funds u/s 80CCC.
- c) Definition of salary u/s 17(1).
- d) Interest on borrowed capital u/s 36(1) (iii).
- e) Deduction in respect of Medical Insurance premia u/s 80 D.
- f) Compensation received at the time of voluntary retirement scheme u/s 10(10C).

Q.6. Answer in short any **FOUR** of the following in relation to Income Tax Act: (2.5 x 4=10)

- a) Discuss provision of section 10(13A) in respect of House Rent Allowance.
- b) Any five perquisites not liable to tax under the head 'Salaries'.
- c) Explain any four points under the Basis of Charge under section 28.
- d) Discuss any five expenses which are not allowed as deduction u/s 37(1) under Profits and Gains from Business and Profession.
- e) Deduction in case of person with disability under section 80U.
- f) Explain briefly Entertainment Allowance under the head 'Salaries'.

T.Y.B. Com Courses (CBCS) Semester V Ordinance

EXAMINATION JANUARY 2021

Accounting Major II : Auditing

[Duration : Two Hours]

[Max. Marks. :80]

Instructions:

1. **All Questions are compulsory.** However, internal choice is available.
2. Answer sub- questions in Question No. 1 and Question No.2 in not more than **100** words each.
3. Answer Question No.3 to Question No.6 in not more than **400** words each.
4. figures to the **right** indicate **full** marks for respective question/ sub question.

Q.1 Answer **any four** of the following:

(4x4=16)

- a. Primary objective of Auditing.
- b. Flow Chart.
- c. Limitations of auditing.
- d. Cost Audit.
- e. Test Checking.
- f. Methods of Audit Sampling.

Q.2 Answer **any four** of the following:

(4x4=16)

- a. Merits of Internal Check System.
- b. Tax Audit
- c. Objectives of Verification.
- d. Distinguish between verification and valuation.
- e. Meaning of Audit Programme.
- f. Explain Audit Working papers.

Q.3 a) Explain the classification of Audit based on time?

12

OR

b) Explain the principles of Auditing.

12

Q.4 a) What is Internal Control Questionnaire? Give a short illustration of 5 questions which can be asked in an ICQ. State its merits and demerits.

12

OR

b) Give the meaning Internal Audit. What is the significance of Internal Audit?

12

Q.5 a) Give the meaning of Audit Plan. Explain the steps in audit planning. 12

OR

b) What are the matters to be included in auditor's report under CARO 2016? 12

Q.6 a) What do you mean by Peer Review? Explain the stages in peer review process. 12

OR

b) Explain the meaning of Management Audit. Also state the objectives and importance. 12

T.Y.B. Com Courses (CBCS) Semester VI Ordinance

EXAMINATION JULY 2021

Accounting Major VI: Accounting – I (DSE 6)

Paper/ Subject Code: UCOD121/ Accounting Major VI: Accounting – I(DSE 6)

[Duration: Two Hours]

[Max. Marks. :30]

Instructions:

1. Answer any 3 questions from the 5 questions given below.

Q1. A ltd purchased a machinery from B ltd on Hire Purchase System on (10)

1st April 2016. The cash price of the machine was Rs.11,00,000. An initial payment of Rs. 3,50,000 was made on the date of purchase. The balance was paid in 3 annual instalments of Rs. 2,50,000 plus interest @ 14% pa on outstanding principal amount. Depreciation is charged @ 10% pa on WDV. A ltd closes its books on 31st March every year. You are requested to draw Machinery a/c and B ltd a/c in the books of A ltd for the year 2016-17, 2017-18 and 2018-19 using Cash Price Method.

Q2. RLB ltd purchased a Machine from Shiva ltd under the Instalment (10) Payment on 1st January 2016. It was agreed that Rs.15,000 was to be paid on signing the agreement and a sum of Rs.15,000 was to be paid annually for 3 years. The cash price of the Machine was Rs.50,000 and the rate of interest was 10 %. Depreciation is charged @20% on the straight-line method. Draw Machinery a/c and interest suspense a/c in the books of RLB ltd for the year 2016, 2017 and 2018.

Q3. Dempo Coal Company worked a coal mine under a lease which provided(10) as under:

1. Royalties to be paid at 50 paise per ton of coal.
2. Minimum rent at Rs. 18,000 p.a.

3. Each year's excess of minimum rent over the actual royalties was to be recouped during the next 3 years.
4. If for any year the normal rent was not attained due to strike or accident the minimum rent was to be reduced proportionately according to the length of stoppage.
5. Following was the output

Year	Output
2013	6,000 tons
2014	25,000 tons
2015	35,000 tons
2016	40,000 tons
2017	35,000 tons
2018	48,000 tons

During the year 2017, there was a strike for 4 months. Write up the Royalties a/c and Short Workings A/c in the books of Dempo Coal Company.

Q4. Following figures are extracted from the books of R2D Super Market.
(10)

Particulars	Dept. A	Dept. B	Dept.C
Stock of goods on 1 st April 2018	42,000	35,620	43,650
Stock of goods on 31 st march 2019	1,70,000	1,24,000	1,00,000
Purchases	2,35,680	3,43,260	4,12,610
Sales	2,62,450	3,91,200	5,24,130
Return inwards	2,450	1,200	4,130
Return outwards	5,680	3,260	2,610
Wages	18,000	16,000	34,000
Additional information			
No. of employees	2	4	5
Area occupied	500 sq. ft	800 sq. ft	300 sq. ft.

Expenses incurred during the year.

Rent Rs. 12,500

Salaries Rs. 30,000

Office expenses Rs. 15,000 (Use Sales ratio)

Printing and stationery Rs. 6,500 (Use Sales ratio)

Advertising Rs. 18,000

Discount received Rs. 9,800

Discount allowed Rs. 4,500

You are required to prepare Departmental Trading and P&L a/c in columnar form for the year ended 31st March 2019 allocating all the expenses on suitable basis among different departments.

Q5. Following information is given to you from the books of Kala agency for(10) its branch at Pune for the financial year 2018-19. Prepare Pune branch a/c and Debtors A/c.

Particulars	Rs	Particulars	Rs
Balance as on 1/4/2018		Transactions during 2018-19	
Branch debtors	12,000	Goods sent by HO	8,000
Stock	6,000	Cash sent by HO for petty cash	3,000
Cash	1,000	Goods lost at branch	730
Balance as on 31/3/2019		Credit sales	36,000
Branch debtors	?	Insurance claim received by branch	700
Cash	6,000	Cash received from debtors	24,000
Stock	10,000	Discount allowed	4,800
		Bad debts	5,200
		Goods returned by debtors	1,000
		Branch expenses paid by HO- salary	3,200
		Advertisement	7,800
		Amount remitted by branch to HO	8,460

B.A I SEMESTER END EXAMINATION,
JANUARY 2021
MODERN INDIAN LANGUAGE COMMUNICATION HNA-101
संप्रेषण कौशल(SAMPRESHAN KAUSHAL)

MARKS:-40

DURATION- 2hr

प्र.1) निम्नलिखित प्रश्नों में से किन्हीं दस प्रश्नों के उत्तर लिखिए।
(20)

1. संप्रेषण का महत्वा।
2. अंतःस्थ व्यंजन को सोदाहरण समझाइए।
3. तद्भव एवं विदेशज शब्दा किन्हीं कहां जाता है?
4. व्यक्तिवाचक संज्ञा को स्पष्ट कीजिए।
5. समास के कितने भेद है? किसी एक भेद पर चर्चा कीजिए।
6. संबंध कारक की भूमिका।
7. मौखिक संप्रेषण की कोई दो विशेषताएं बताइए।
8. कोई भी संप्रेषण सफल कब होता है?
9. 'प्रेत का बयान' कविता के कवि का नाम बताते हुए, प्रेत अपना परिचय किस प्रकार यमराज को देता है?
10. निशीथ के चरित्र पर संक्षेप में चर्चा कीजिए।
11. 'बनारस' कविता में बनारस की पौराणिकता को किस प्रकार दर्शाया है?
12. फूलों की सगाई किससे हुई थी? फूलों अपने दूल्हों को देखकर क्यों शरमाती है?
13. घाट पर बैठे बंदरो एवं भिकारियों के चेहरे की खुशी का कवि ने किस प्रकार चित्रण किया है?
14. "तू किसी रेल सी गुजरती है मैं किसी पुल-सा थरथराता हूं" उपयुक्त पंक्तियों से कवि क्या कहने की कोशिश कर रहे है?
15. लोकतंत्र के खोखलेपन का अंकन कवि केदारनाथ अग्रवाल ने किस प्रकार किया है?
16. लहनासिंह के चरित्र पर संक्षेप में चर्चा कीजिए।

प्र.2) निम्नलिखित प्रश्नों में से किन्हीं चार प्रश्नों के उत्तर लिखिए।

(20)

1. 'उसने कहा था' कहानी की सुवेदारनी।
2. संप्रेषण के प्रकारों की विस्तार में चर्चा कीजिए।
3. सकर्मक क्रिया एवं अकर्मक क्रिया की भूमिका।
4. 'ग्रहण' कहानी में व्यक्त स्त्री जीवन की वेदना को स्पष्ट कीजिए।
5. विशेषण की अवधारणा एवं उसके किन्हीं दो भेदों को सोदाहरण स्पष्ट कीजिए।
6. 'यही सच है' कहानी में चित्रित प्रेम संबंध।

XX

MES COLLEGE OF ARTS & COMMERCE
Zuarinagar, Goa
BA II SEMESTER END EXAMINATION, JULY 2021
ENGLISH
EGC 202 – COMMUNICATIVE ENGLISH 1.2
(Core Course)

Duration: 2 Hours
Marks: 40

Max.

Instructions:

- 1) All questions are compulsory.
-

I. Answer the following in about 350-400 words:
(10x04)

Q1A Write a discursive essay on the topic: 'Achieving the targets is more important than a slavish display of punctuality'.

OR

Q1B Write a short story by elaborating upon the following beginning theme:
The College picnic bus to Kankona, was supposed to be picking Mita at the Cortalim junction. Shucks!!! She missed it by a few seconds. She hitched a lift with a passing car,
to overtake the bus. But...

Q2A Write a feature article on the topic: 'Goan Tourism During the Pandemic'.

OR

Q2B International Yoga Day was celebrated on 21st June 2021. Write a feature article on 'The Benefits of Practicing Yoga'.

Q3A You are Anthony Fernandes, Health Officer at the local Healthcare Centre. Write a report

about the overall health of the Covid-19 positive patients and the vaccination drive conducted by the centre. Also mention the medical facilities provided by the centre and other relevant details.

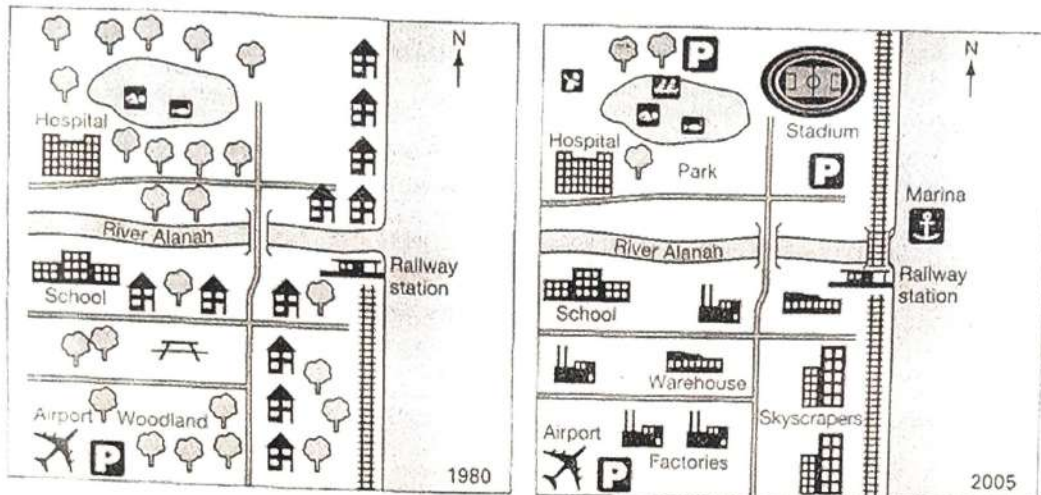
OR

Q3B An online Farewell Party was organised for the Third Year students by the Student Council

of the College, on 1st July 2021. As the Cultural Secretary of the Council, write a report on the event.

Q4A The following maps show the changes that have taken place in a town, from 1980 to 2005.


Summarize the information by selecting and reporting the main features, and make comparisons where relevant.



OR

Q4B The following pie-chart shows the percentage distribution of the expenditure incurred by a

Company, in publishing a book. Study the pie-chart and summarize the information presented.



B.A Semester III Examination, Aug, 2021
Political Science DSC
PSCC1A: Indian Constitution

Duration: 02 Hours

Total Marks: 40

Instructions:

- i. All questions are compulsory.*
- ii. Answer sub-questions in Q I in 100 words each.*
- iii. Answer Q II in 400 words each.*

Q. I. Answer any ten of the following:

(5 X

2=20)

1. Define Constituent Assembly.
2. Define Fundamental Rights.
3. What is Right against exploitation?
4. What is Right to Constitutional remedies?
5. What is the composition of Loksabha?
6. What is the function of the Speaker of Loksabha?
7. What is Judicial Review?
8. What is Judicial Activism?

Q.II. Answer any Four of the following:

(6 X 5=20)

1. Why is Indian Constitution considered as unique?
2. Explain the Preamble to Indian Constitution.
3. Examine various provisions pertaining to Equality in Indian Constitution.
4. Describe Fundamental Duties.
5. Examine the Legislative powers of the President of India.
6. Analyse the role and functions of the Prime Minister of India?
7. Explain Legislative Procedure in India.
8. Elaborate on the power and jurisdiction of the Supreme Court of India.

B.A Semester IV Examination, July, 2021
Political Science DSC
PSCC2B: Constitutional and Social Issues in India
Duration: 02 Hours **Total Marks: 40**

Instructions:

- i. *All questions are compulsory.*
- ii. *Answer sub-questions in Q I in 100 words each.*
- iii. *Answer Q II in 400 words each.*

Q. I. Answer any ten of the following: (5X

2=10)

1. What is federalism?
2. State features of Panchayati raj system.
3. State any two ideological aspects of Congress party.
4. Differentiate between regional and national parties in India.
5. State any two required reforms in Indian electoral system.
6. Why is caste important in Indian political context?
7. Write features of Article 21-A.
8. How Right to work in India is protected?


Q.II. Answer any SIX of the following: (6X 5=30)

1. Describe the federal features of Indian Constitution.
2. Explain the irritants in Centre-State relations in India.
3. Describe Financial Relations between Centre and State.
4. Analyse the problems faced by the Election Commission of India.
5. Explain the composition and working of Election Commission of India.
6. Explain the ideology of Bharatiya Janata Party.
7. What were the reasons behind the rise of various identity based political parties in India from 1990s?
8. Describe the concept of Right to Food in India.

B. A. (Semester - V) CBCS Examination, January 2021

SOCIOLOGY SOC 106

Sociology of Gender



Duration: 2 Hours

Instructions:

1. All questions are **compulsory**, however **internal choice** is available.
2. Answer sub-questions in question 1 and question 2 in **not** more than 100 words.
3. Answer question 3 to question 6 in **not** more than 400 words each.
4. Figures to the **right** indicate **maximum** marks.

Q.1. Answer **any four** of the following:

(4x4=16)

- a) How is gender different from sex?
- b) Role of social reformers in India.
- c) What are the main arguments of Radical Feminism?
- d) Define the concept of sexism, masculinity, femininity and patriarchy.
- e) Write a note on women's position in the Vedic Period.
- f) Briefly describe the main features of the Israeli Kibbutzim.

Q.2. Briefly explain **any four** of the following:

(4x4=16)

- a) Fertility and Fecundity -
- b) Causes for Infant Mortality in India
- c) Sex Ratio
- d) Surrogacy
- e) Women's 'Second Shift'
- f) Meaning of personal laws

Q.3. a) Explain the significance of George Murdock's research work.

12

OR

Q.3. b) Examine the position of women during the Medieval period.

12

Q.4. a) Explain the biological theory of Lionel Tiger and Robin Fox on sex roles.

12

OR

Q.4. b) Assess the status of women in the Post Independent India.

12

Q.5. a) Write a note on the various methods of conceptions.

12

OR

Q.5. b) Analyze the political empowerment of women in India.

12

Q.6. a) Examine the status of women in Hinduism.

12

OR

Q.6. b) Discuss the Christian and Parsi Personal laws.

12

B.A SEMESTER VI – (Under CBCS ORDINANCES)
Examination, July 2021
SOCIOLOGY (SOD 105)
Sociology of Marginalised Groups

Instructions:

- i) *All questions are compulsory*
- ii) *Answer any five sub-questions each in Q. I*
- iii) *Answer any four sub questions each in Q. II*

Duration: 02 hours

Marks:30

Q 1. Answer any five of the following:

(5X 2 =10)

1. Jyotirao Govindrao Phule's contribution towards women's education
2. Profile of Dr. B. R. Ambedkar
3. Early life of Jyotirao Govindrao Phule
4. Main work of Satyashodak Samaj
5. Marginalisation at the community level
6. Land issues faced by the Scheduled tribes
7. Social legislation for the differently abled
8. Constitutional provision for the Other Backward Classes

Q II Answer any four of the following

(4x5=20)

- i. Phule's effort towards elimination of caste discrimination
- ii. Debate surrounding reservation
- iii. Functions of National Human Rights Commission
- iv. Social and religious problems of the Scheduled caste
- v. Various types of differently abled groups
- vi. Constitutional provisions for the religious minorities in India

ISA-1 Micro Economics (CC 3)

M.E.S. College of Arts and Commerce

Department of Economics

B. Com. I.S.A. – I Semester I Class: F.Y. B. Com C

ISA-1 Micro Economics (CC 3)

1. Students are expected to maintain a high standard of discipline and ethics, while answering the exam.

2. Write down your full, alpha-numeric, roll number.

* Required

1. Email address *

2. Name *

3. Full Roll No. *

4. Date *

Example: January 7, 2019

5. Time of answering the ISA *

Example: 8:30 AM

MCQ ISA-1

Instructions:

1. This online test is made up of total 10 marks.
2. Question nos. 1 & 2 are of 2 marks each. All the other questions are of 1 mark each.
3. Select (click) the correct option from the alternatives given below each question.

6. 1. Given the demand equation $Q_d = 95 - 5P$; what is the quantity demanded (Q_d) when $P = ₹4$ and when $P = ₹7$? *

Mark only one oval.

- ☐ 75 & 60
- ☐ 75 & 65
- ☐ 75 & 66
- ☐ 75 & 55

7. 2. Suppose the price elasticity of demand for mobile phones is -9. If the price goes up by 5%, what will be the impact on the quantity of the mobile phones purchased? What type of price elasticity of demand are we looking at here? *

Mark only one oval.

- ☐ Demand decreases by 45%; relatively inelastic demand.
- ☐ Demand increases by 54%; relatively elastic demand.
- ☐ Demand decreases by 45%; relatively elastic demand.
- ☐ Demand decreases by 45%; unitary elastic demand.

8. 3. The price elasticity of demand equals: *

Mark only one oval.

- ☐ the percentage change in the quantity demanded divided by the percentage change in the price.
- ☐ the change in the quantity demanded divided by the change in price.
- ☐ the percentage change in the price divided by the percentage change in the quantity demanded.
- ☐ the change in the price divided by the change in quantity demanded.

9. 4. The price elasticity of demand can range between: *

Mark only one oval.

- ☐ negative one and one.
- ☐ zero and infinity.
- ☐ zero and one.
- ☐ negative infinity and infinity.

10. 5. The law of demand implies that demand curves: *

Mark only one oval.

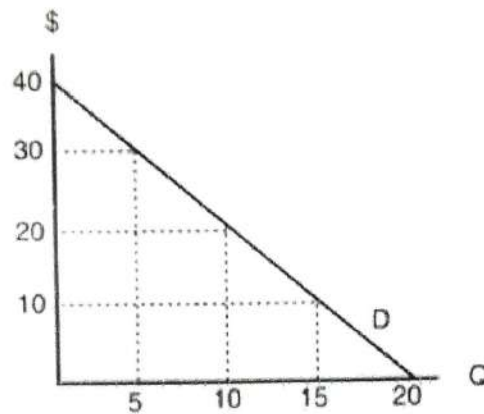
- ☐ shift rightwards, whenever price rises.
- ☐ slopes downward, left to right, as price rises.
- ☐ shifts leftward, whenever price rises.
- ☐ slopes upward, left to right, as price rises.

11. 6. When we say there is an increase in quantity demanded, due to a fall in price, we mean that there is a: *

Mark only one oval.

- ☐ movement to the right along a demand curve.
- ☐ movement to the left along a demand curve.
- ☐ leftward shift of the demand curve.
- ☐ rightward shift of the demand curve.

12. 7. Based on the diagram given for this question, if the price of the good falls from \$ 30 to 10\$, what would be change in quantity demanded? *



Mark only one oval.

- ☐ 10 units
- ☐ 5 units
- ☐ 15 units
- ☐ 20 units

3. 8. Which of the following is NOT a determinant of the demand for good X? *

Mark only one oval.

- ☐ The income of consumers who buy good X.
- ☐ The cost of labor used to produce good X.
- ☐ The price of good Y, a complement to X.
- ☐ The number of buyers of good X.

This content is neither created nor endorsed by Google.

ISA-1 Indian Economy - I (ECC 105)

M.E.S. College of Arts and Commerce
Department of Economics
B.A. (GENERAL / HONOURS) ECONOMICS
I.S.A. - I Semester V Class: T.Y. B.A.
Date: 31/10/2020

1. Students are expected to maintain a high standard of discipline and ethics, while answering the exam.
 2. Write down your full, alpha-numeric, roll number.
- * Required

1. Email address

2. Name

3. Full Roll No. *

MCQ ISA-

1

Instructions:

1. This online test is made up of total 10 marks
2. Select (click) the correct option from the alternatives given below each question.

4. 1. Among the following, the best indicator of economic development of a country is

Mark only one oval.

- ☐ Its industrial development
- ☐ Its gross production
- ☐ Its per capita income
- ☐ Its agricultural output

5. 2. What is NSSO?

Mark only one oval.

- ☐ National Social Science Organisation
- ☐ National Sample Survey Organisation
- ☐ National Social Study Organisation
- ☐ National Security Science Organisation

6. 3. The contribution of the Indian agricultural sector to GDP over the years has been:

Mark only one oval.

- ☐ Increasing
- ☐ Decreasing
- ☐ Constant
- ☐ None of there

7. 4. The Reserve Bank of India was established on

Mark only one oval.

- ☐ 1st April 1935
- ☐ 1st April 1936
- ☐ 1st April 1937
- ☐ 1st April 1938

8. 5. Which of these was never included in the calculation of HDI:

Mark only one oval.

- ☐ life expectancy
- ☐ maternal mortality rate
- ☐ mean years of schooling
- ☐ standard of living

4. 6. India is currently considered to be a:

Mark only one oval.

- ☐ Developed country
- ☐ Developing country
- ☐ Under developed country
- ☐ None of these

10. 7. The value of all final goods and services produced within a country during a particular year is called as:

Mark only one oval.

- ☐ Gross Domestic Product
- ☐ Net Domestic Product
- ☐ National Product
- ☐ Production of Tertiary Sector

11. 8. The employment figures of the country are based on data collected from the surveys on employment and unemployment. Which organisation conducts this survey?

Mark only one oval.

- ☐ NSSO
- ☐ National Rural Employment Guarantee Act, 2005
- ☐ International Labour Organisation
- ☐ Census of India

9. Which of the following is not a limitation of the PQLI:

Mark only one oval.

- ☐ There is no unanimity among economists as to the number and types of items to be included in such an index.
- ☐ The majority of indicators are inputs and not output such as education, health etc.
- ☐ The social indicators included emphasize the quality of life, rather than only the incomes.
- ☐ There is the problem of assigning weights to the various items which may depend upon the social, economic and political set up of the country.

13. 10. In 2014, the HDI used the geometric mean for the calculation of the overall index and the education index.

Mark only one oval.

- ☐ True
- ☐ False

This content is neither created nor endorsed by Google.

Google Forms

ISA 1 - Accounting Major 2- AUDITING

DSE 2 16th October 2020

All questions are compulsory. Time limit is 1 hour. Link will become inactive at 11.15am

* Required

1. Email *
2. roll no *
3. NAME OF THE STUDENT *

ISA 1- Accounting Major 2-AUDITING
DSE 2 16th October 2020

All questions are compulsory. Time limit is 1 hour. Link
will become inactive at 11.15am

4. Selective examination of transaction is recognized as an acceptable practice worldwide. *

Mark only one oval.

true

false

5. The auditor should be free from bias and emotions while conducting audit. *

Mark only one oval.

Principle of objectivity

Principle of integrity and independence

Principle of Skill and competence

5. Making exhaustive inquiries till he ascertains the information required to understand the state of affairs of the client's business. This is what quality of an Auditor? *

Mark only one oval.

- ☐ Responsible and Prudent
- ☐ Objectivity, Independency and Transparency
- ☐ integrity
- ☐ none of the above

7. system of audit which is prevalent in large banks. *

Mark only one oval.

- ☐ complete audit
- ☐ bank audit
- ☐ concurrent audit

8. P&L A/c is not given much importance in this type of audit. *

Mark only one oval.

- ☐ balance sheet audit
- ☐ concurrent audit
- ☐ partial audit

9. conducted between 2 final audits *

Mark only one oval.

- ☐ interim audit
- ☐ concurrent audit
- ☐ none of the above

10. What gave rise to in a big way the businesses of insurance, banking and public limited companies.? *

Mark only one oval.

- ☐ industrial policy
- ☐ industrial revolution
- ☐ industrial advancement

of duplication affects the tallying of trial balance.

Mark only one oval.

☐ yes

☐ no

12. presentation of accounts more favourably than what they actually are *

Mark only one oval.

☐ teeming and lading

☐ fraud

☐ window dressing

13. Inadequate provision for depreciation is what type of error. *

Mark only one oval.


☐ error of commission

☐ error of principle

☐ error of omission

This content is neither created nor endorsed by Google.

Google Forms

 Swati A. Shigavkar

Assessment

M. E. S. COLLEGE OF ARTS & COMMERCE

B. A. IV SEMESTER I ISA, MARCH 2021

ENGLISH MAJOR: DSC 2B: BRITISH POETRY & DRAMA (17th & 18th Centuries)

Duration: 45 minutes

Total Marks: 10

INSTRUCTIONS: 1] Answer the questions in 100 words each.

* Required

1. Name *

2. Roll No. *

3. Email *

4. 1. Who are the two main female characters in the play, 'The Rover?'

2 points

5. 2. What is the role of disguise in the play? *

2 points

6. 3. Callis is the . . . of the sisters

1 point

Mark only one oval per row.

	servant	cousin	governess	aunty
Row 1	<input type="radio"/>	<input type="radio"/>	<input type="radio"/>	<input type="radio"/>

7. 4. Compare and contrast the two lead pairs of the play.

3 points

Google Forms

8. 5. Draw a character sketch of any two minor male characters in the play. *

2 points

This content is neither created nor endorsed by Google.

Assessment

M. E. S. COLLEGE OF ARTS & COMMERCE

B. A. V SEMESTER I ISA, OCTOBER 2020

ENGLISH MAJOR: END 101-LITERARY CRITICISM

Duration: 60 minutes

Total Marks: 10

INSTRUCTIONS: 1] Answer the questions in 100 words each.

* Required

1. Name and Roll No. *

2. Email *

3. 1. What do you understand by the term 'Literary Criticism?' *

2 points

4. 2. What language should be used in poetry and why, according to Wordsworth? *

2 points

3. What is good poetry, according to Wordsworth? *

2 points

6. 4. Differentiate between fancy and imagination. *

2 points

Google Forms

7. 5. What does Coleridge mean by secondary imagination?

2 points

This content is neither created nor endorsed by Google.

ISA - I B.com Semester III examination Oct, 2020

Subject: Entrepreneurship Development

Class: B. com Semester : III Div : C Academic Year: 2020-21 Total Marks : 10

Instructions:

1. Each Question carries 1 marks.
2. Select the appropriate option out of the four option

 swatias1978@gmail.com (not shared) Switch account



* Required

class *

Your answer

4. This theory is developed by Abdul Mahumad Aziz

1 point

- ☐ 1. Sociology Theory
- ☐ 2. Integrated Theory
- ☐ 3. Economic Theory

name of the student *

Your answer



roll no *

Your answer

div *

Your answer

1.The word entrepreneur is derived from the French word _____

1 point

- ☐ 1. Entreprendre
- ☐ 2.Entrepre
- ☐ 3.Enterprise
- ☐ 4.Antrepre

3. He is of the opinion that the entrepreneurs are primarily motivated by will to power. 1 point

- ☐ 1. J.R. Harris
- ☐ 2. Philip Kotler
- ☐ 3. Carl Pearson
- ☐ 4. Schumpeter



10. This technique is used to collect secondary data.

1 point

- ☐ 1. Experiment method
- ☐ 2. Desk Research
- ☐ 3. Observation Method
- ☐ 4. Test Marketing

8. It is a kind of survey to get expert opinion.

1 point

- ☐ 1. Delphi Technique
- ☐ 2. Observation Method
- ☐ 3. Experiment Method
- ☐ 4. Test Marketing

7. In SWOT analysis O stands for _____.

1 point

- ☐ 1. Opportunities
- ☐ 2. Organisation
- ☐ 3. Online
- ☐ 4. None of the above

5. The Term Intrapreneur was coined in _____

1 point

- ☐ 1. UK
- ☐ 2. India
- ☐ 3. USA
- ☐ 4. Australia



6. The Full form of SHG is _____.

1 point

- ☐ 1. Self Housing Group
- ☐ 2. Self Help Group
- ☐ 3. Sustainable Help Group
- ☐ 4. Social Help Group

9. Telephone interview is one of the type of _____ technique of marketing research.

1 point

- ☐ 1. Test Marketing
- ☐ 2. Field survey technique
- ☐ 3. Experiment Method
- ☐ 4. None of the above.

2. According to him economic incentives are the main drive for entrepreneurial activities.

1 point

- ☐ 1. G. F. Papnek
- ☐ 2. Hagen
- ☐ 3. Peter Marris
- ☐ 4. A.H. Cole

Page 1 of 1

Submit

Clear form

Never submit passwords through Google Forms.

This content is neither created nor endorsed by Google. [Report Abuse](#) - [Terms of Service](#) - [Privacy Policy](#)

Google Forms



ISA -I , B.COM Semester I

Subject : General Managemnt (CC 1)

Academic year : 2020-21

Class: F.Y. B.com Div : B

Total Marks : 10

Date : 23/10/2020

- Instructions : 1.All questions are compulsory
2. Each question carries one mark.

swatias1978@gmail.com Switch account



* Required

Email *

Your email

Name of the student *

Your answer

Roll no *

Your answer

Class *

Your answer



Division *

Your answer

This is the first company to introduce quality circle in 1962 *

1 point

- ☐ Nippon Wireless and telegraph company
- ☐ Hippon textiles
- ☐ Adtext wireless company

2. Lifetime employment is the feature of *

1 point

- ☐ American style of management
- ☐ European style of management
- ☐ japanese style of management

3. Contingency approach is also known as *

1 point

- ☐ Quantitative approach
- ☐ Modern approach
- ☐ Situational approach



4. "To Manage is to forecast and to plan, to organise, to command, to co-ordinate and to control" is the definition given by *

1 point

- ☐ Henry Fayol
- ☐ F.W. Taylor
- ☐ George Terry

5. Strategic decisions are taken by this level of management. *

1 point

- ☐ Top level
- ☐ middle level
- ☐ lower level

6. Personnel management deals with *

1 point

- ☐ Recruitment
- ☐ Materials Procurement
- ☐ Capital

7. He is the father of marketing management. *

1 point

- ☐ Lazo
- ☐ Philip Kotler
- ☐ Corbin

8. Building and machinery is an example of _____ capital. *

1 point

- ☐ Working
- ☐ Fixed
- ☐ both fixed and working

9. People orientation is the practice of *

1 point

- ☐ American
- ☐ Japan
- ☐ European

10. It is also known as "Management Science" approach *

1 point

- ☐ Contingency
- ☐ Quantitative
- ☐ Qualitative

Submit

Clear form

Never submit passwords through Google Forms.

This content is neither created nor endorsed by Google. [Report Abuse](#) - [Terms of Service](#) - [Privacy Policy](#)

Google Forms

